



Complete the sums.



$$1 + 3 = 4$$



$$\dots + \dots = \dots$$



$$\dots + \dots = \dots$$



$$\dots + \dots = \dots$$




.....

+

.....

=

.....





.....

+

.....

=

.....




.....

+

.....

=

.....



.....

+

.....

=

.....