



N6


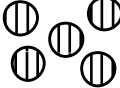
# Number


L1MN

# 26

Name: \_\_\_\_\_ Class: \_\_\_\_\_ Date: \_\_\_\_\_

## Adding objects with a sum of up to 9:

Example:  +  = 7



Can you write this as numbers?

Answer:  $2 + 5 = 7$

This is called an **equation**.



### Task 29

Add these objects by **counting** and **write** the answer in the box.

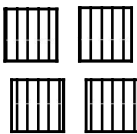

Then **write** the equation in the space below.

1.  +  =



..... + ..... = .....

2.  +  =



..... + ..... = .....

3.  +  =

..... + ..... = .....

4.  +  =

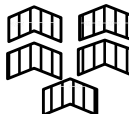

..... + ..... = .....

5.  +  =



..... + ..... = .....

6.  +  =



..... + ..... = .....

7.  +  =



..... + ..... = .....

8.  +  =

..... + ..... = .....

9.  +  =

..... + ..... = .....

10.  +  =

..... + ..... = .....